

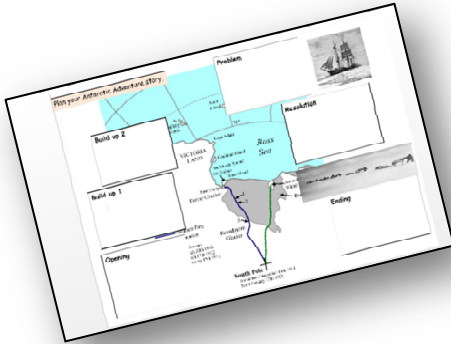
Well done to the superstars in Alan's class for putting on a very entertaining class assembly!



Year Two Home Learning  
Spring 2, Week 3 15.03.19

## This week we have been .....

- *planning our own extended Antarctic Adventure story and exploring how to make it exciting*



Explain what makes a good story to somebody.  
What is the difference between an *opening* and a *build-up*?  
What is a *dilemma*?  
What does *resolution* mean?  
Give an example of when we use commas in our writing.


- *focusing on mental maths by adding and subtracting numbers and finding the difference between numbers:*

What strategy will you use to solve these without paper? There are some more challenges overleaf.

$$20 + 10 = ? \quad 25 - 4 - 2 = ? \quad 36 + ? = 56 \quad ? - 10 = 37$$

70 is 26 more than


- *building our orienteering skills using maps to find special hidden flags around the school grounds*



Stand in your home and try to guess which way North is.  
How can you check whether you're right or wrong?



8-17 March  
British  
Science  
Week  
2019



- *observing, predicting, testing, experimenting, recording and chatting to a real scientist as part of British Science Week 2019.*

Spellings for this week

## The /er/ Sound Spelt With 'or' and the /or/ Sound Spelt With 'ar'

h w g m z t m c e k r m  
d r f g x b u t z m x y  
t q t e p w f f f a a i  
o v d f a a w o r t h q  
w h t w o r k t j n n r  
a s k e w o r l d g l u  
r l n f o w a r m v j o  
d x w o r m m i d t e q  
s g w f s x m f v d k f  
t j k d t w o r d y j m  
l w a r d h g s w g l e  
l s s o u k g q w b e g

word world war towards  
work worth warm ward  
worm worst

Mr Baker buys a shirt and a pair of trousers.



The total cost is £40

The shirt costs £12

How much **more** does the pair of trousers cost than the shirt?

The difference between two numbers is 15

One of the numbers is 42

What could the other number be?